

NAME: \_\_\_\_\_


DATE: \_\_\_\_\_

SECTION: \_\_\_\_\_

SCORE: \_\_\_\_\_

# BASIC SUBTRACTION WORKSHEET

Fill out the box with the right answer.




$4 - 1 =$




$3 - 1 =$



$5 - 3 =$



$4 - 2 =$



$2 - 1 =$