


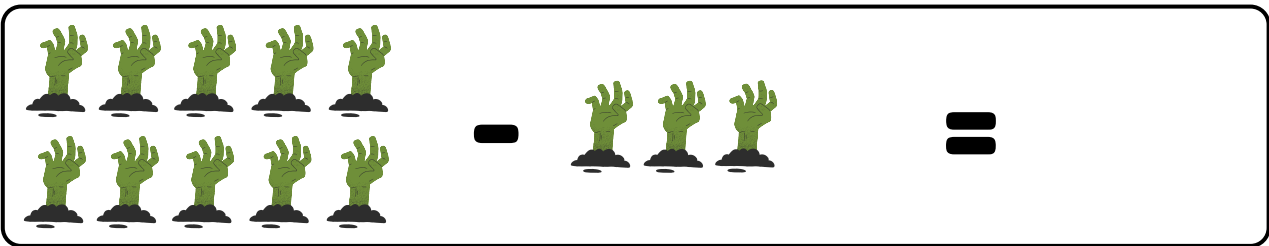
Name: _____

Halloween Subtraction!

Find the difference in each equation. Write your answer after the equal sign.



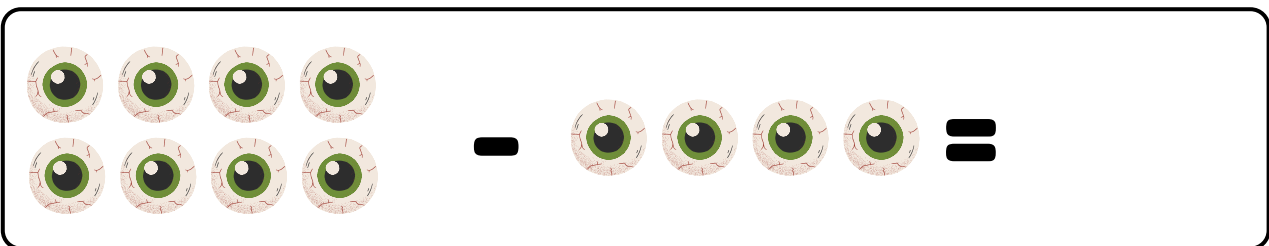
10 purple cauldrons in two rows of five, minus 2 purple cauldrons in one row, equals.




10 green zombie hands in two rows of five, minus 3 green zombie hands in one row, equals.



8 jack-o'-lanterns in two rows of four, minus 5 jack-o'-lanterns in two rows (one of four and one of one), equals.



8 eyeballs in two rows of four, minus 4 eyeballs in one row, equals.



10 purple witch hats in two rows of five, minus 4 purple witch hats in one row, equals.