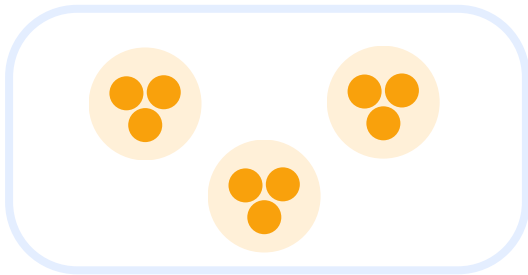


Name: _____

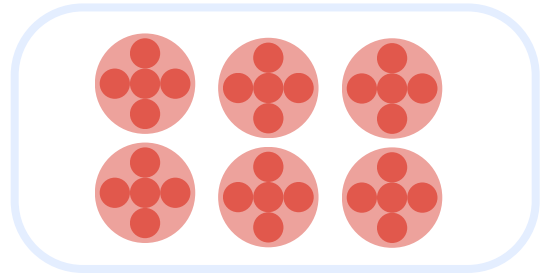
Date: _____

Multiplication & Division Using Equal Groups

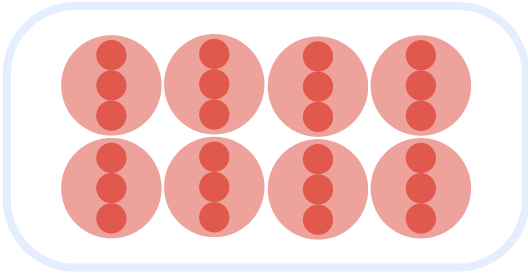
Fill in the blanks to describe the equal group models.



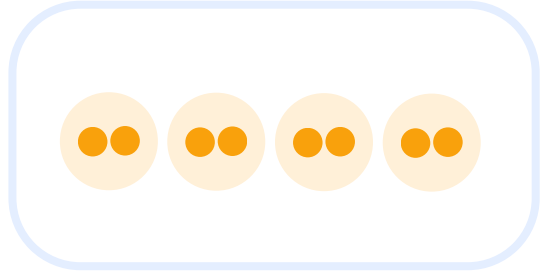
$$\underline{\quad} \times \underline{\quad} = \underline{\quad}$$
$$\underline{\quad} \div \underline{\quad} = \underline{\quad}$$



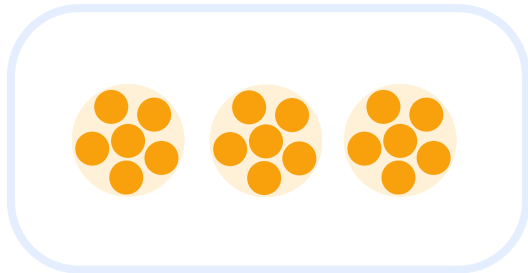
$$\underline{\quad} \times \underline{\quad} = \underline{\quad}$$
$$\underline{\quad} \div \underline{\quad} = \underline{\quad}$$




$$\underline{\quad} \times \underline{\quad} = \underline{\quad}$$
$$\underline{\quad} \div \underline{\quad} = \underline{\quad}$$



$$\underline{\quad} \times \underline{\quad} = \underline{\quad}$$
$$\underline{\quad} \div \underline{\quad} = \underline{\quad}$$



$$\underline{\quad} \times \underline{\quad} = \underline{\quad}$$
$$\underline{\quad} \div \underline{\quad} = \underline{\quad}$$



$$\underline{\quad} \times \underline{\quad} = \underline{\quad}$$
$$\underline{\quad} \div \underline{\quad} = \underline{\quad}$$

